



# DELHI PUBLIC SCHOOL

SAIL Township, Ranchi

SECOND SEMESTER EXAMINATION (SESSION-2022-23)

**SUBJECT:** ENGLISH

**DATE :-** 21.02.2023

**CLASS:** – II **Sec:-** \_\_\_\_\_

**Time:** 2 Hours

**M.O. :-** \_\_\_\_\_

**Roll no.:-** \_\_\_\_\_

**F. M. :-** 80

**NAME:-** \_\_\_\_\_

**I. Answer the following questions in complete sentences: (2x4 =8)**

1. In the poem ‘Come and Play in the Garden’, where did the flowers grow?

Ans. \_\_\_\_\_  
\_\_\_\_\_  
\_\_\_\_\_

2. Where was the smoke coming from?

Ans. \_\_\_\_\_  
\_\_\_\_\_  
\_\_\_\_\_

3. Who helped the gingerbread man? How did he help him?

Ans. \_\_\_\_\_  
\_\_\_\_\_  
\_\_\_\_\_

4. What is the funniest thing about the shadow?

Ans. \_\_\_\_\_  
\_\_\_\_\_  
\_\_\_\_\_

**II. Who said to whom? : (1x2=2)**

1. “Fireman Firoz is very brave and strong.”

\_\_\_\_\_ said to the \_\_\_\_\_

2. “Moo!Moo! I want to eat you.”

The \_\_\_\_\_ said to the \_\_\_\_\_

**III. Make Sentences: (1x5=5)**

1. fire - \_\_\_\_\_  
\_\_\_\_\_

2. shining - \_\_\_\_\_  
\_\_\_\_\_

3. strong - \_\_\_\_\_  
\_\_\_\_\_

4. likely - \_\_\_\_\_

\_\_\_\_\_

5. exciting - \_\_\_\_\_

\_\_\_\_\_

**IV. Write the word meanings of :**

**(1x6=6)**

1. pleasant - \_\_\_\_\_

4. currants - \_\_\_\_\_

2. arrant - \_\_\_\_\_

5. shoots up - \_\_\_\_\_

3. sly - \_\_\_\_\_

6. notion - \_\_\_\_\_

**V. Write a paragraph on any one of the following topics given below.**

**(5x1=5)**

1. Being Thankful

2. Health is Wealth

3. Our National Festivals

\_\_\_\_\_

\_\_\_\_\_

\_\_\_\_\_

\_\_\_\_\_

\_\_\_\_\_

\_\_\_\_\_

\_\_\_\_\_

\_\_\_\_\_

\_\_\_\_\_

\_\_\_\_\_

\_\_\_\_\_

\_\_\_\_\_

\_\_\_\_\_

\_\_\_\_\_

\_\_\_\_\_

\_\_\_\_\_

\_\_\_\_\_

\_\_\_\_\_

\_\_\_\_\_

\_\_\_\_\_

\_\_\_\_\_

\_\_\_\_\_

\_\_\_\_\_

\_\_\_\_\_

\_\_\_\_\_

\_\_\_\_\_

\_\_\_\_\_



**VII. Read the passage and answer the questions given below :**

**(1x5=5)**

My grandma always loses her spectacles. So, she needs my help to find them. Sometimes I find them in the bathroom, on her bed or on the table. Last evening, I had to look for her glasses again. Do you know where I found them? After searching everywhere, I saw them on her head!

1. What does grandma always lose?

\_\_\_\_\_

2. Where were grandma's spectacles found?

\_\_\_\_\_

3. Write a suitable title for the passage given above.

\_\_\_\_\_

4. Write two pronouns from the passage given above.

\_\_\_\_\_ , \_\_\_\_\_

5. From the passage, find and write the opposites of the following:

a) first - \_\_\_\_\_

b) part - \_\_\_\_\_

**VIII. Answer the following questions in one word:**

**(1x8=8)**

1. How did the gingerbread man look?

\_\_\_\_\_

2. Who is the poet of the poem, 'My Shadow'?

\_\_\_\_\_

3. What is the name of your English L.R. book?

\_\_\_\_\_

4. What was on show at the school?

\_\_\_\_\_

5. What was the name of the teacher in the story 'Firoz and the Fire Engine'?

\_\_\_\_\_

6. What is the name given to the group of letters added after a word to make a new word?

\_\_\_\_\_

7. Complete the sentence:

The gingerbread man reached a \_\_\_\_\_ and didn't know how to swim.

8. We use the -est form of a word to make comparative adjectives. True or false?

\_\_\_\_\_

**IX. Rewrite the sentences by adding capital letters and punctuation marks:**

**(1.5 + 1 + 1.5=4)**

1. firoz bought milk butter and bread from the market

\_\_\_\_\_

2. where are you going

---

3. did you write your name class and section on the paper

---

**X. Fill in with suitable adjectives: (1x4=4)**

1. She is an \_\_\_\_\_ girl.
2. Pick up the \_\_\_\_\_ box.
3. The fox is a \_\_\_\_\_ animal.
4. Solomon was a \_\_\_\_\_ king.

**XI. Fill in by adding the -er and -est (more, most) form of adjectives: (0.5x4=2)**

1. big - \_\_\_\_\_, \_\_\_\_\_
2. pleasant - \_\_\_\_\_, \_\_\_\_\_

**XII. Fill in with prepositions: (1x5=5)**

1. Rani is coming back \_\_\_\_\_ Monday.
2. The baby is hiding \_\_\_\_\_ the curtain.
3. There is someone \_\_\_\_\_ the door.
4. Stand \_\_\_\_\_ a queue.
5. The boy jumped \_\_\_\_\_ the pool.

**XIII. Fill in the blanks with the past tense form of the words given in the brackets:**

**(1x3=3)**

1. I \_\_\_\_\_ my bike last evening. (ride)
2. Ravi \_\_\_\_\_ me yesterday. (call)
3. We \_\_\_\_\_ to the zoo last Sunday. (go)

**XIV. Underline the conjunctions in the following sentences: (1x4=4)**

1. Is Raman playing (and/or) sleeping?
2. The woman is old (and/but) weak.
3. I am thin (or/but) my sister is fat.
4. She washed the dishes (and/but) put them away.

**XV. Match the following:**

**(0.5x8=4)**

- |            |               |                      |
|------------|---------------|----------------------|
| 1. did not | a. hoots      | <input type="text"/> |
| 2. rabbit  | b. right      | <input type="text"/> |
| 3. utilize | c. fireworks  | <input type="text"/> |
| 4. them    | d. didn't     | <input type="text"/> |
| 5. yawned  | e. squeaks    | <input type="text"/> |
| 6. boom    | f. use        | <input type="text"/> |
| 7. correct | g. sleepily   | <input type="text"/> |
| 8. owl     | h. themselves | <input type="text"/> |

**XVI. Fill in by choosing the correct answers from the brackets:**

**(1x10=10)**

1. \_\_\_\_\_ (What/Who) are you cooking?
2. The \_\_\_\_\_ (tailor/drapeer) sold a curtain yesterday.
3. Hit the \_\_\_\_\_ (break/brake) to make the car stop.
4. Riya hurt her left \_\_\_\_\_ (eye/I) while playing.
5. The cat is playing with \_\_\_\_\_ (it's/its) tail.
6. Computers are \_\_\_\_\_ (useful/useless) devices.
7. The students waited \_\_\_\_\_ (patiently/quickly) for their turn.
8. \_\_\_\_\_ (How/Which) did you make the painting?
9. \_\_\_\_\_ ( Crazy/ Scream) and yell have similar meaning.
10. Do you \_\_\_\_\_ (has/have) a pen?



# DELHI PUBLIC SCHOOL

SAIL Township, Ranchi

## SECOND SEMESTER EXAMINATION ( SESSION-2022-23)

**SUBJECT:** EVS

**DATE :-** 25.02.2023

**CLASS:** – II      **Sec:-** \_\_\_\_\_

**Time:** 2 Hours

**M.O. :-** \_\_\_\_\_

**Roll no.:-** \_\_\_\_\_

**F. M. :-** 80

**NAME:-** \_\_\_\_\_

**1. Answer the following questions:-**

**(2 x 7 = 14)**

a) How can we measure time?

Ans. \_\_\_\_\_  
\_\_\_\_\_  
\_\_\_\_\_

b) In which season do trees shed their leaves ?

Ans. \_\_\_\_\_  
\_\_\_\_\_  
\_\_\_\_\_

c) The climbers cannot stand straight, why ?

Ans. \_\_\_\_\_  
\_\_\_\_\_  
\_\_\_\_\_

d) How are plants useful for animals?

Ans. \_\_\_\_\_  
\_\_\_\_\_  
\_\_\_\_\_

e) How do fish swim in water?

Ans. \_\_\_\_\_  
\_\_\_\_\_  
\_\_\_\_\_

f) How do animals help us in growing crops?

Ans. \_\_\_\_\_  
\_\_\_\_\_  
\_\_\_\_\_

g) Who are non-vegetarians?

Ans. \_\_\_\_\_  
\_\_\_\_\_  
\_\_\_\_\_

**2. Name them:-**

**(1 x 10 = 10)**

- a) Night becomes longest and day becomes shortest on this date - \_\_\_\_\_
- b) Sometimes we see a rainbow in the sky in this season - \_\_\_\_\_
- c) These grow into new plants - \_\_\_\_\_
- d) They eat the flesh of other animals - \_\_\_\_\_
- e) First animal tamed by man - \_\_\_\_\_
- f) It is known as the ship of the desert - \_\_\_\_\_
- g) It is the season of flowers and butterflies - \_\_\_\_\_
- h) This is made from the pulp of bamboo tree - \_\_\_\_\_
- i) Animals that eat the flesh of dead animals - \_\_\_\_\_
- j) The plants with weak stems and thin branches which grow along the ground- \_\_\_\_\_

**3. Give two examples for each of the following:-**

**(1 x 6 = 6)**

- a) Medicinal plants- \_\_\_\_\_ , \_\_\_\_\_ .
- b) Herbs - \_\_\_\_\_ , \_\_\_\_\_ .
- c) Shrubs- \_\_\_\_\_ , \_\_\_\_\_ .
- d) Climbers- \_\_\_\_\_ , \_\_\_\_\_ .
- e) Creepers - \_\_\_\_\_ , \_\_\_\_\_ .
- f) Carnivores - \_\_\_\_\_ , \_\_\_\_\_ .

**4. Unjumble these letters to form the correct words:-**

**(1 x 5 = 5)**

- a) DACAROMM - \_\_\_\_\_
- b) TRTCEOP - \_\_\_\_\_
- c) AESSON - \_\_\_\_\_
- d) TSECINS - \_\_\_\_\_
- e) EAFHTERS - \_\_\_\_\_



**5. Fill in the blanks with the help of the words in the help box given below :- (0.5 x 10 = 5)**

oxygen, silk, burrow, Basant, loo, fish, herbivores, map, twenty four, honey

- a) A day has \_\_\_\_\_ hours.
- b) A \_\_\_\_\_ is a diagram or a drawing of a particular area.
- c) Spring season is called \_\_\_\_\_ in Hindi.
- d) Hot winds that blow in summer are called \_\_\_\_\_.
- e) A rabbit's hole is called a \_\_\_\_\_.
- f) \_\_\_\_\_ have neither legs nor wings.
- g) \_\_\_\_\_ is a fine and soft cloth.
- h) We get \_\_\_\_\_ and wax from beehives.
- i) Plant eating animals are called \_\_\_\_\_.
- j) \_\_\_\_\_ is required for burning.

**6. Match the following:-**

**(0.5 x 10 = 5)**

- |                  |                       |                          |
|------------------|-----------------------|--------------------------|
| a) Crab          | (i) thick brown woody | <input type="checkbox"/> |
| b) Spice         | (ii) cinnamon         | <input type="checkbox"/> |
| c) Hot and sunny | (iii) ghee            | <input type="checkbox"/> |
| d) Trees         | (iv) seafood          | <input type="checkbox"/> |
| e) Root          | (v) sunflower         | <input type="checkbox"/> |
| f) oil           | (vi) snake            | <input type="checkbox"/> |
| g) crawls        | (vii) radish          | <input type="checkbox"/> |
| h) cow           | (viii) summer         | <input type="checkbox"/> |
| i) manure        | (ix) omelettes        | <input type="checkbox"/> |
| j) Eggs          | (x) dried dung        | <input type="checkbox"/> |

**7. Write True or False:-**

**(0.5 x 10 = 5)**

- a) We use quilts and blankets in winter. \_\_\_\_\_
- b) We see a rainbow in summer. \_\_\_\_\_
- c) Flowers and leaves of many plants are used for decoration. \_\_\_\_\_
- d) Wood is used to make clothes. \_\_\_\_\_
- e) We use dry leaves to make compost. \_\_\_\_\_
- f) Camel gives us manure. \_\_\_\_\_
- g) Leaves are the kitchen of the plant. \_\_\_\_\_
- h) Plants give us only medicine. \_\_\_\_\_
- i) We crush seeds of plants to get oil. \_\_\_\_\_
- j) Plants store food in different parts. \_\_\_\_\_

**8. Fill in with suitable words :-**

**(1 x 4 = 4)**

- a) \_\_\_\_\_ is absorbed by the plants while making their food.
- b) The \_\_\_\_\_ plant is a green bush and its nuts grow with the roots.
- c) We tame \_\_\_\_\_ animals because they are useful to us.
- d) A \_\_\_\_\_ can swallow an animal larger than itself.

**9. Fill in with correct letters:-**

**(0.5 x 8=4)**

- a) M I \_ \_ T \_ \_ S.
- b) E \_ \_ E N \_ \_ N G
- c) K \_ \_ U \_ \_ K L E S
- d) T \_ \_ U N K
- e) C A \_ \_ E S
- f) S \_ \_ A R \_ \_ O W
- g) B A M \_ \_ O \_ \_
- h) T \_ \_ A

**10. Define with an example :**

**(2x4=8)**

- a) Wild animals- \_\_\_\_\_  
\_\_\_\_\_  
\_\_\_\_\_
- b) Omnivores - \_\_\_\_\_  
\_\_\_\_\_  
\_\_\_\_\_

c) Trees - \_\_\_\_\_

\_\_\_\_\_

\_\_\_\_\_

d) Season - \_\_\_\_\_

\_\_\_\_\_

\_\_\_\_\_

**11. Circle the odd ones out:-**

**(0.5 x 8 = 4)**

- |             |            |         |          |
|-------------|------------|---------|----------|
| a) neem     | eucalyptus | tulsi   | heena    |
| b) gum      | ghee       | perfume | resin    |
| c) paneer   | cheese     | paper   | khoya    |
| d) summer   | monsoon    | sun     | winter   |
| e) blankets | jacket     | frock   | quilts   |
| f) roots    | leaves     | stem    | fins     |
| g) zebra    | lion       | deer    | elephant |
| h) cow      | camel      | donkey  | horse    |

**12. Draw, colour and label :-**

**(2 x 5 =10)**

<u>A thing which we use in Rainy season</u>	<u>A shrub</u>

A herbivore

A thing which we get from animals

A thing which we get from plants



# DELHI PUBLIC SCHOOL

SAIL Township, Ranchi

SECOND SEMESTER EXAMINATION (SESSION-2022-23)

**SUBJECT:** Hindi

**DATE :-** 23.02.2023

**CLASS: – II Sec:-** \_\_\_\_\_

**Time:** 2 Hours

**M.O. :-** \_\_\_\_\_

**Roll no.:-** \_\_\_\_\_

**F. M. :-** 80

**NAME:-** \_\_\_\_\_

1. दिए गए प्रश्नों के उत्तर लिखें :- [2 x6=12]

1) रंगों को किसने बंद कर दिया था ?

उत्तर – .....

.....

.....

2) यान से उतरकर चमकू ने क्या देखा ?

उत्तर – .....

.....

.....

3) छतरी से हमें क्या सीख मिलती है ?

उत्तर – .....

.....

.....

4) रास्ते में शीबू को कौन-कौन मिला था ?

उत्तर – .....

.....

.....

5) रक्षाबंधन का त्योहार कैसे मनाया जाता है ?

उत्तर – .....

.....

.....

6) मीतू की माँ ने क्या सलाह दी ?

उत्तर – .....

.....

.....

2. दिए गए शब्दों के अर्थ लिखें :-

[1x 6=6]

- 1) परिश्रम -..... 2) सूझ -.....  
3) इनकार -..... 4) वचन -.....  
5) अतिरिक्त -..... 6) दुहाई -.....

3. दिए गए शब्दों से वाक्य बनाएँ :-

[1x5=5]

- 1) भुलक्कड़ -.....  
2) ज़िददी -.....  
3) राहत -.....  
4) जगमग -.....  
5) त्योहार -.....

4. दिए गए अपठित गद्यांश को पढ़कर प्रश्नों के उत्तर दें :-

[1x5=5]

एक बार एक कौए और हंस में बहुत अच्छी दोस्ती हो गई। दोनों एक-दूसरे से बहुत अलग थे। हंस सबकी मदद करता था लेकिन कौए को दूसरों को तंग करने में बड़ा मजा आता था। एक दिन दोनों पेड़ पर बैठे बातें कर रहे थे, तभी एक आदमी आराम करने के लिए उस पेड़ के नीचे बैठ गया। थोड़ी देर में उसे नींद आ गई। हंस ने देखा कि उस आदमी पर धूप पड़ रही है, इसलिए उसने अपने पंख फैलाकर उस पर छाया कर दी। पर कौए ने उस आदमी पर ऊपर से ढेर सारा कूड़ा गिरा दिया और उस आदमी की नींद खुल गई।

नीचे दिए गए प्रश्नों के उत्तर पूरे वाक्य में दें -

1) कौन सबकी मदद करता था ? (1)

उत्तर -.....

2) पेड़ के नीचे कौन बैठ गया ? (1)

उत्तर -.....

3) खाली स्थान भरिए। (0.5x2=1)

i) हंस ने देखा कि उस आदमी पर ..... पड़ रही है।

ii) थोड़ी देर में उसे ..... आ गई।

4) दिए गए शब्दों के विलोम शब्द चुनकर लिखें:- (1x2=2)

i) दुश्मनी x - .....

ii) तकलीफ x - .....

5. नीचे दिए गए किसी भी एक विषय पर अनुच्छेद लिखें :-

[1x5=5]

1) समाचार पत्र

2) राष्ट्रीय पर्व

3) मेरी प्यारी माँ

.....

.....

.....

.....

.....

.....

.....

.....

.....

.....

.....

.....

.....

.....

.....

.....

.....

6. किसने, किससे कहा ?

[0.5 x4=2]

1) "यह कोई कठिन काम नहीं है। बस थोड़े परिश्रम की आवश्यकता है।"

.....

2) "क्या खिलाया था नानी ने ?"

.....

7. दिए गए कविता की पंक्तियाँ पूरी करें : -

[1x4=4]

अभी-अभी थी धूप, बरसने

लगा ..... ?

किसने फोड़ घड़े बादल के

की ..... ?

सूरज .....

अपने घर का दरवाजा ?

उसकी .....

बुला लिया कहकर आजा ?

8. नीचे दिए गए प्रश्नों के उत्तर एक शब्द में दें : —

[1x4=4]

1) नाटक 'रंगो का त्योहार' किसने लिखा है ?

.....

2) 'वसंत' कविता में कौन इठलाती है ?

.....

3) 'पानी और धूप' कविता को किसने लिखा है ?

.....

4) एक जैसे अर्थ बताने वाले शब्द विशेषण कहलाते हैं। सही या गलत ?

.....

9. सही शब्द चुनकर रिक्त स्थानों में भरें :-

[0.5 x10=5]

1) तान्या और मीतू पक्की ..... थी ।( सहेली/सहेलियाँ )

2) इंद्र की पत्नी ने ..... की कलाई पर रक्षा का सूत्र बाँधा । ( राक्षसों/देवताओं )

3) शनिवार से पहले ..... आता है । ( रविवार/शुक्रवार )

4) जो शब्द संज्ञा शब्दों के स्थान पर आते हैं, उन्हें ..... कहते हैं । ( विलोम/सर्वनाम )

5) ..... मिट्टी के बर्तन बनाता है । ( मूर्तिकार /कुम्हार )

6) ..... और चमकू अच्छे मित्र बन गए । ( किसान/धोबी )

7) चमकू ने धरती पर उतरकर चारों ओर ..... का उजाला देखा ।

( हरियाली भरे गाँव/चाँद की रोशनी )

8) जादूगरनी का नाम ..... था । ( चप्पन चूँ-चूँ / छप्पन चूँ-चूँ )

9) शीबू ने चटनी के साथ ..... खाया । (खीर /खिचड़ी)

10) अपने लिए ..... का प्रयोग करते हैं । (आप /हम)

10. दिए गए शब्दों के विलोम शब्द लिखें :-

[1x6=6]

1) सरदी x —.....

4) ऊपर x —.....



2) नया x -..... 5) अँधेरा x -.....

3) सस्ता x -..... 6) हल्का x -.....

11. सही शब्द चुनकर वाक्य पूरे कीजिए :-

[0.5x6=3]

1) ..... आराम करना चाहिए ।( तुम/तुम्हें )

2) शाम को खेलने के बाद ..... बहुत भूख लगती है। ( मुझे/मेरा )

3) ..... क्या पढ़ रहा है ? ( तुम/वह )

4) राज स्कूल जा रहा था, ..... बस्ता भारी था। ( उसका/उसके )

5) कल ..... अपने मामा के घर जाऊँगा। ( हम /मैं )

6) ..... घर बहुत बड़ा है। ( उन्होंने/उसका )

12. दिए गए शब्दों के एक पर्यायवाची शब्द लिखें :-

[1x6 =6]

1) पहाड़ -..... 2) विद्यालय -.....

3) धरती -..... 4) पथ -.....

5) पेड़ -..... 6) मेघ -.....

13. दिए गए वाक्यों में से क्रिया शब्द को रेखांकित करें :-

[0.5 x6=3]

1) अली पुस्तक पढ़ रहा है।

2) बाहर बारिश हो रही है।

3) रोहन बहुत अच्छा क्रिकेट खेलता है।

4) पक्षी आकाश में उड़ रहे हैं।

5) मैं सुबह जल्दी उठती हूँ।

6) हवा चल रही है।

14. नीचे दिए गए रिक्त स्थान पर उचित विशेषण शब्द लिखकर वाक्य पूरा करें :- [1x6=6]

- 1) रवि बहुत ..... लड़का है।
- 2) यह अंगूर ..... है।
- 3) रात का भोजन ..... था।
- 4) तितली बहुत ..... है।
- 5) मेरे पास ..... पेंसिल है।
- 6) बगीचे में ..... गुलाब खिले हैं।

15. दिए गए अंग्रेजी अंकों को हिन्दी शब्द और हिन्दी अंक में लिखें :- [1x6 =6]

हिन्दी अंक

हिन्दी शब्द

- 1) 15 -..... , .....
- 2) 19 -..... , .....
- 3) 17 -..... , .....

16. दिए गए अनेक शब्दों के लिए एक शब्द लिखें :- [1x2 =2]

- 1) जो मूर्ति बनाता है - .....
- 2) जो साथ पढ़ता है - .....



# DELHI PUBLIC SCHOOL

SAIL Township, Ranchi

SECOND SEMESTER EXAMINATION (SESSION-2022-23)

**SUBJECT:** Mathematics

**DATE :-** 28.02.2023

**CLASS: – II Sec:-** \_\_\_\_\_

**Time:** 2 Hours

**M.O. :-** \_\_\_\_\_

**Roll no.:-** \_\_\_\_\_

**F. M. :-** 80

**NAME:-** \_\_\_\_\_

**1. Write the number names:** **(1 x 6=6)**

a) 901 - \_\_\_\_\_.

b) 443 - \_\_\_\_\_.

c) 714 - \_\_\_\_\_.

d) 586 - \_\_\_\_\_.

e) 666 - \_\_\_\_\_.

f) 840 - \_\_\_\_\_.

**2. Match the following:** **[0.5x6=3]**

**A**

- a. No. of days in a year
- b. 12:30
- c. quotient
- d. 1 L
- e. dice
- f. circle

**B**

- i) no corners
- ii) cube
- iii) 365
- iv) result of division
- v) half past twelve
- vi) 1000 ml

**3. True or False:** **[0.5x6=3]**

- a. Two days after Tuesday is Wednesday
- b. Standard unit of capacity is ml.
- c. The symbol ₹ is used for 'Rs'.
- d. Two halves make a whole.
- e. When it is 5:30, the hour hand is between 5 and 6.
- f. Fraction means part of a whole.

**4. Fill in the blanks :**

**(1x10=10)**

- a) Cuboids have \_\_\_\_\_ edges.
- b) The 9<sup>th</sup> month of a year is \_\_\_\_\_.
- c) Division means \_\_\_\_\_.
- d) 2 rupees = \_\_\_\_\_ paise.
- e) Number of months with 31 days is \_\_\_\_\_.
- f) A \_\_\_\_\_ is a part of a whole.
- g) Capacity of a big oil tin is measured in \_\_\_\_\_.
- h) Standard Unit of length is \_\_\_\_\_.
- i) 1 Kilograms = \_\_\_\_\_ grams.
- j) If yesterday was Friday then tomorrow will be \_\_\_\_\_ .

**5. Write two division facts for each of the following multiplication facts :**

**(2 x 3 = 6)**

- a)  $9 \times 8 = 72$  : \_\_\_\_\_ , \_\_\_\_\_
- b)  $7 \times 4 = 28$  : \_\_\_\_\_ , \_\_\_\_\_
- c)  $8 \times 6 = 48$  : \_\_\_\_\_ , \_\_\_\_\_

**6. Divide using multiplication tables :**

**(0.5 x 6 = 3)**

- a)  $40 \div 5 =$  \_\_\_\_\_
- b)  $49 \div 7 =$  \_\_\_\_\_
- c)  $63 \div 9 =$  \_\_\_\_\_
- d)  $16 \div 4 =$  \_\_\_\_\_
- e)  $50 \div 10 =$  \_\_\_\_\_
- f)  $54 \div 6 =$  \_\_\_\_\_

**7. Solve the following :****(1x10=10)**

a)  $136 \text{ m}$

$247 \text{ m}$

$+ 485 \text{ m}$

---

---

b)  $\text{kg} \quad \text{g}$

$30225$

$- 19187$

---

---

c)  $\text{L} \quad \text{mL}$

$155 \quad 632$

$+ 77 \quad 88$

---

---

d)  $\text{m} \quad \text{cm}$

$103 \quad 45$

$- 68 \quad 28$

---

---

e)  $453 \text{ rupees}$

$89 \text{ rupees}$

$+ 7 \text{ rupees}$

---

f)  $34 \text{ p}$

$+ 56 \text{ p}$

---

g)  $263 \text{ rupees}$

$147 \text{ rupees}$

$+ 59 \text{ rupees}$

---

h)  $70 \text{ p}$

$- 51 \text{ p}$

---

i)  $73 \text{ p}$

$- 48 \text{ p}$

---

j)  $500 \text{ rupees}$

$- 235 \text{ rupees}$

---

**8. Fill in the placeholders :****(0.5 x 8 = 4)**

a)  $5 \times 0 =$  \_\_\_\_\_

b)  $8 \times 9 =$  \_\_\_\_\_

g)  $3 \times 5 =$  \_\_\_\_\_

c)  $12 \times 3 =$  \_\_\_\_\_

d)  $11 \times 6 =$  \_\_\_\_\_

h)  $2 \times 9 =$  \_\_\_\_\_


e)  $7 \times 7 =$  \_\_\_\_\_

f)  $7 \times 8 =$  \_\_\_\_\_


9. Draw the diagram of a :

(1 x 3 = 3)


a) Cube



b) Cone



c) Cylinder



10. Answer these questions :

(1 x 4 = 4)

a) If the 2<sup>nd</sup> of a month is Tuesday. Then the next Tuesday falls on \_\_\_\_\_.

b) Deepak had 3 ten-rupee notes. He spent ₹ 26. How much money was left with Deepak?

Ans. \_\_\_\_\_.

c) Count the number of lines in the given word.

**I N D I A**

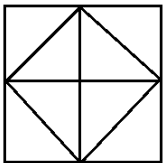
i) Standing lines \_\_\_\_\_

ii) Sleeping lines \_\_\_\_\_

d) I have one vertex, one plane face, one curved face and one edge. Who am I?

Ans. \_\_\_\_\_.

e) How many triangles can you see in the given figure?



Ans. \_\_\_\_\_.

11. Fill in the suitable units used to measure :

(0.5 x 4 = 2)

a) The height of man - \_\_\_\_\_

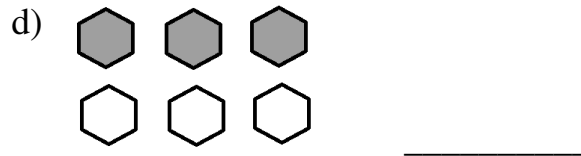
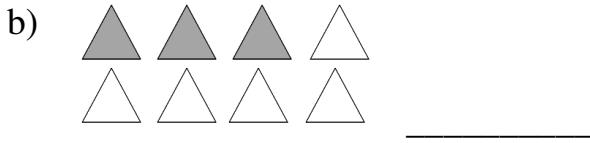
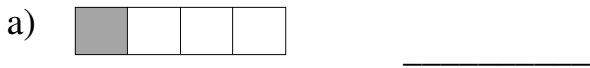
b) Quantity of petrol filled in a car - \_\_\_\_\_

c) Weight of a mobile phone - \_\_\_\_\_

d) Quantity of nail polish in a bottle - \_\_\_\_\_


**12. Write fractions for the shaded portion :**

**(1 x 4=4)**



**13. Write the time shown by the following clocks in two different ways :**

**(0.5x8=4)**



**14. Word Problems :**

**[2.5 x 4= 10]**

a) A fruit seller sells 29 kg of mangoes and 68 kg of apples. Find the total weight of fruit he sells?

b) A tailor bought a reel of thread measuring 500 metres. He used 372 metres for stitching clothes. How much thread was left with him?

c) Sonia had 50 rupees. She bought a pencil box for 15 rupees. How much money is left with her?

d) Sachin did not go to school from Monday to Friday. For how many days was Sachin absent from school?

15. Divide the following and write quotient and remainder:

[2x 4=8]

a)  $9 \overline{) 81}$

b)  $7 \overline{) 42}$

Q - \_\_\_\_\_

Q - \_\_\_\_\_

R - \_\_\_\_\_

R - \_\_\_\_\_

c)  $6 \overline{) 48}$

d)  $8 \overline{) 32}$

Q - \_\_\_\_\_

Q - \_\_\_\_\_

R - \_\_\_\_\_

R - \_\_\_\_\_





# DELHI PUBLIC SCHOOL

SAIL Township, Ranchi

SECOND SEMESTER ( SESSION-2022-23)

**SUBJECT:** General Knowledge

**DATE :-** 17.02.2023

**CLASS: – II Sec:-** \_\_\_\_\_

**Time: 1 Hour**

**M.O. :-** \_\_\_\_\_

**Roll no.:-** \_\_\_\_\_

**F. M. :- 25**

**NAME:-** \_\_\_\_\_

## I. Fill in the blanks :

( 1x 4 = 4)

1. \_\_\_\_\_ is the capital of Karnataka.
2. Buddhism is based on the teachings of \_\_\_\_\_.
3. \_\_\_\_\_ in Western India is famous for its beaches.
4. \_\_\_\_\_ is an Indian social activist. His real name is Kisan Baburao Hazare.

## II. Name them :

(1 x 4 = 4)

1. Largest mosque in India :  
\_\_\_\_\_
2. Young one of a kangaroo :  
\_\_\_\_\_
3. Tea gardens of India are found in this state :  
\_\_\_\_\_
4. Father of our Indian constitution :  
\_\_\_\_\_

## III. Match the following :

(0.5 x 10 = 5)

- |                                    |                                     |                          |
|------------------------------------|-------------------------------------|--------------------------|
| 1. leap year                       | a. tadpole                          | <input type="checkbox"/> |
| 2. Clark kent                      | b. Fort St. George and Marina Beach | <input type="checkbox"/> |
| 3. tambourine                      | c. Kashmir                          | <input type="checkbox"/> |
| 4. Subhash Chandra Bose            | d. trees                            | <input type="checkbox"/> |
| 5. palace of winds                 | e. Lucknow                          | <input type="checkbox"/> |
| 6. city of nawabs and tasty kebabs | f. Jaipur                           | <input type="checkbox"/> |
| 7. big and tall plants             | g. Netaji                           | <input type="checkbox"/> |
| 8. Noon chai                       | h. musical instrument               | <input type="checkbox"/> |
| 9. Chennai                         | i. Superman                         | <input type="checkbox"/> |
| 10. frog                           | j. 366 days                         | <input type="checkbox"/> |

**P.T.O.**

**IV. Choose the correct answer from the box and fill in the blanks :**

**(1 x 4 = 4)**

Euro, 9 <sup>th</sup> September, P.T. Usha, India
---

1. \_\_\_\_\_ is the currency of Italy.
2. Himalaya Day is celebrated on \_\_\_\_\_ .
3. World's largest producer of milk is \_\_\_\_\_.
4. First woman president of Indian Olympic Association is \_\_\_\_\_ .



**V. Write 'T' for true and 'F' for false :**

**(0.5 x 8 = 4)**

1. Fish use gills to breathe underwater. \_\_\_\_\_
2. Carrots are the stems of the plant. \_\_\_\_\_
3. Guru Granth Sahib is known as the founder of Sikhism. \_\_\_\_\_
4. Bihu festival is celebrated in West Bengal. \_\_\_\_\_
5. Punjab is called the 'Land of five rivers'. \_\_\_\_\_
6. Rishikesh in Uttarakhand is known as the 'Yoga Capital of the World'. \_\_\_\_\_
7. Fred Flintstone is the cute little canary bird who likes to sway and sing. \_\_\_\_\_
8. Climbers grow along the ground. \_\_\_\_\_

**VI. Identify the figures and write their names :**

**(1 x 2 = 2)**

	
1. _____	2. _____

**VII. Think and answer :**

**(1 x 2 = 2)**

1. Mughal Garden, situated at Rashtrapati Bhawan, New Delhi is renamed as –

\_\_\_\_\_

2. The 2023 ICC Under 19 Women's T-20 World Cup is won by –

\_\_\_\_\_



# DELHI PUBLIC SCHOOL

SAIL Township, Ranchi

SECOND SEMESTER EXAMINATION (SESSION-2022-23)

**SUBJECT:** Computer

**DATE :-** 15.02.2023

**CLASS: – II Sec:-** \_\_\_\_\_

**Time: 1 Hour**

**M.O. :-** \_\_\_\_\_

**Roll no.:-** \_\_\_\_\_

**F. M. :-** 20

**NAME:-** \_\_\_\_\_

**Q1) Choose the most suitable alternative: [0.5X4=2]**

- a) \_\_\_\_\_ option is used to change the background colour of the paint screen .
  - i) Color 1
  - ii) Color 2
  - iii) Color 3
  - iv) Color 4
- b) A \_\_\_\_\_ is a piece of information stored in a computer.
  - i) Folder
  - ii) File
  - iii) Music
  - iv) Recycle Bin
- c) Which tool is used to draw free form lines or curves?
  - i) Line
  - ii) Eraser
  - iii) Curve
  - iv) Oval
- d) Which button is used to shrink the active screen in paint?
  - i) Minimize
  - ii) Maximize
  - iii) Toolbox
  - iv) Close

**Q2) Fill in the blanks:- [1X4 = 4]**

- a) The small arrow which we see on the monitor is called \_\_\_\_\_.
- b) The blank space in paint where we can draw is known as \_\_\_\_\_.
- c) \_\_\_\_\_ tool is like a big container of colours.
- d) There are \_\_\_\_\_ types of brushes in the brushes tool.

**Q3) Write True or False:- [0.5X4 = 2]**

- a) A folder can also contain other folders. \_\_\_\_\_
- b) Pressing the left mouse button twice is called double clicking. \_\_\_\_\_
- c) One should never save his work in a computer. \_\_\_\_\_
- d) We cannot increase the size of the eraser. \_\_\_\_\_

**Q4) Missing letters: [0.5X4 = 2]**

- a) D\_\_ \_\_ K T\_\_ P
- b) P\_\_ \_\_ N T E \_\_
- c) E \_\_ \_\_ IP\_\_ E
- d) I\_\_ E X F \_\_ G \_\_ R

**Q5) Name the following tools in Paint :**

**[1X4=4]**

- a) To type some text in the drawing.
- b) To draw a straight line.
- c) To draw a rectangle or a square box.
- d) To erase a part of a drawing.

---

---

---

---

**Q6) Answer the following questions :**

**[2X2=4]**

- a) What is Paint?

---

---

---

---

- b) Write any two uses of mouse.

---

---

---

---

---

**Q7) Name the indicated parts of the 'PAINT'.**

**[0.5X4=2]**

